

# Slope-Intercept Form Part 3

May-10-17  
10:59 AM

## Mathematics 9 Linear Relations Slope-Intercept Form Part 3

### A. Definitions

1. slope: ratio of the vertical change (rise) to the horizontal change (run) of a line or a line segment.

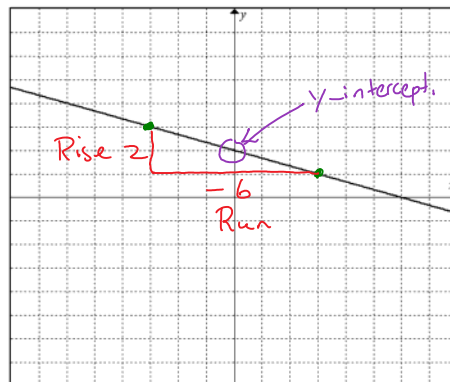
$$\text{Slope} = \frac{\text{Rise}}{\text{Run}}$$

2. y-intercept: the y-coordinate of the point where a line or curve crosses the y-axis. It is the value of  $y$  when  $x=0$ .
3. slope-intercept form: the equation of a line written in the form  $y = mx + b$ , where  $m$  represents the slope of the line and  $b$  represents the y-intercept of the line.

### B. Finding the equation of a line in Slope-Intercept Form

- 1) Use the following graph to answer the questions.

- a) Look closely at the graph and find 2 exact points.
- b) Use the points to calculate slope by finding Rise and Run.



- a) Calculate the slope of the line.

$$\text{slope} = \frac{\text{Rise}}{\text{Run}} = \frac{2}{-6} = \boxed{-\frac{1}{3}}$$

- b) Determine the coordinates of the y-intercept.

$$y\text{-int } (0, 2)$$

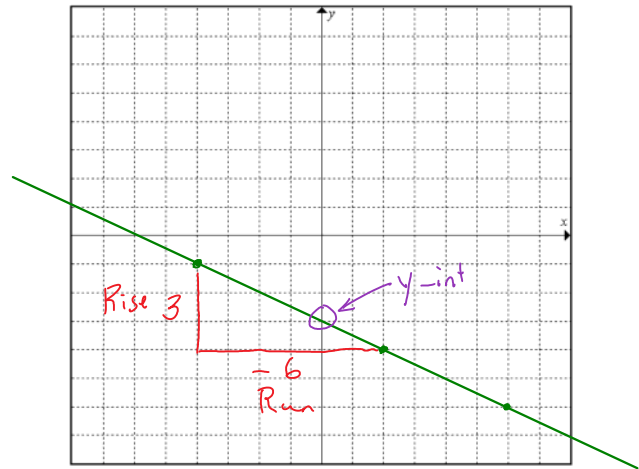
- c) Use the slope and y-intercept to write the equation of the line in slope-intercept form.

$$\text{Slope-intercept form } y = mx + b$$

$$\boxed{y = -\frac{1}{3}x + 2}$$

- 2) The following points are located on the line. Draw the line and then determine the slope, the coordinates of the y-intercept and then write the equation of the line in slope-intercept form.

x	y
-4	-1
2	-4
6	-6



$$\text{Slope} = \frac{\text{Rise}}{\text{Run}} = \frac{3}{-6} = \boxed{-\frac{1}{2}}$$

$$\text{y-int } (0, -3)$$

$$\boxed{y = -\frac{1}{2}x - 3}$$

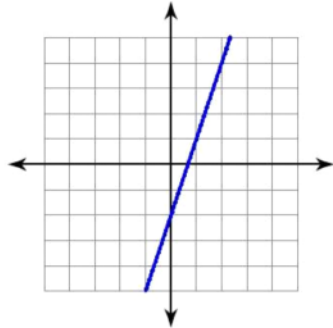
Assignment : Slope-Intercept Form Part 3 Assignment

Name: \_\_\_\_\_

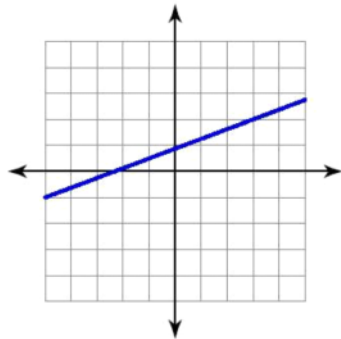
Slope-Intercept Form Part 3 Assignment

A. Find the slope, the coordinates of the y-intercept and then write the equation of the following lines in slope-intercept form.

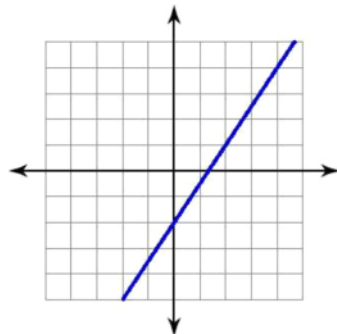
1)



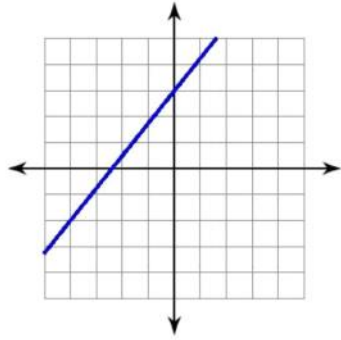
2)



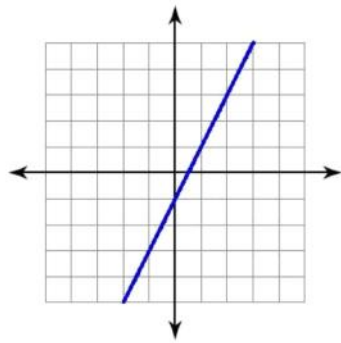
3)



4)




5)



B. The following points are located on the line. Draw the line and then determine the slope, the coordinates of the y-intercept and then write the equation of the line in slope-intercept form .

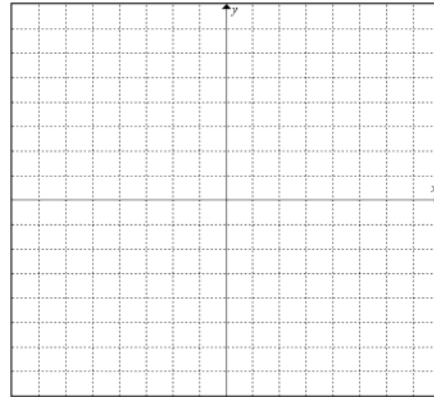
1)

x	y
4	-4
-1	6
2	0



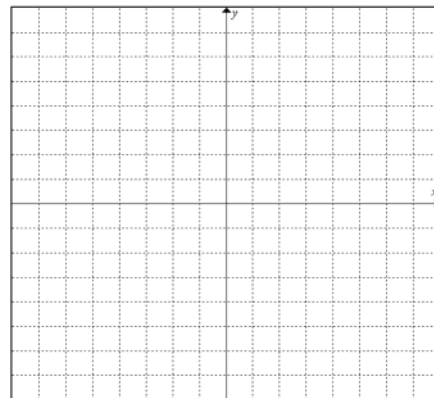
2)

x	y
-6	-5
3	-2
6	-1



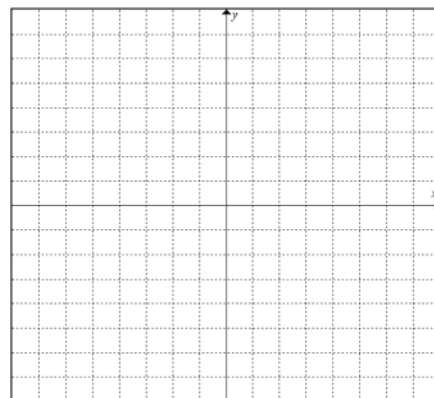
3)

x	y
1	-2
2	2
3	6



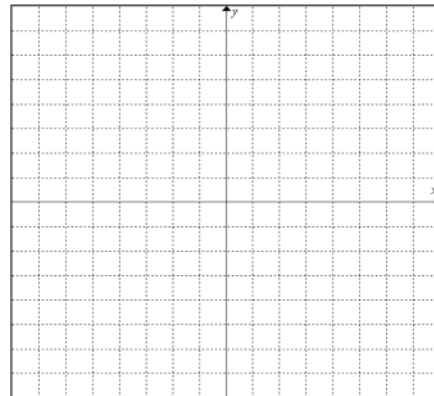
4)

x	y
-6	5
-3	3
6	-3



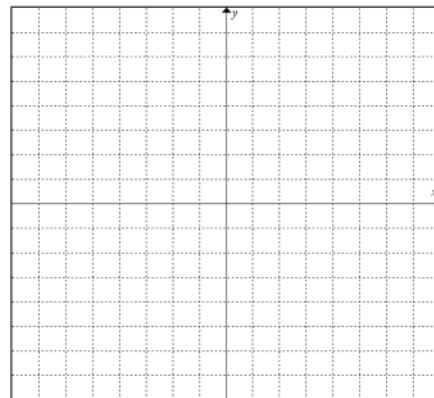
5)

x	y
-2	3
4	6
6	7



6)

x	y
-8	8
4	-1
8	-4



Answers

- A. 1)  $Slope = 3$   
 $y$ -int(0,-2)  
 $y = 3x - 2$
- 2)  $Slope = \frac{1}{3}$   
 $y$ -int(0,1)  
 $y = \frac{1}{3}x + 1$
- 3)  $Slope = \frac{3}{2}$   
 $y$ -int(0,-2)  
 $y = \frac{3}{2}x - 2$
- 4)  $Slope = \frac{5}{4}$   
 $y$ -int(0,3)  
 $y = \frac{5}{4}x + 3$
- 5)  $Slope = 2$   
 $y$ -int(0,-1)  
 $y = 2x - 1$
- D. 1)  $Slope = -2$   
 $y$ -int(0,4)  
 $y = -2x + 4$
- 2)  $Slope = \frac{1}{3}$   
 $y$ -int(0,-3)  
 $y = \frac{1}{3}x - 3$
- 3)  $Slope = 4$   
 $y$ -int(0,-6)  
 $y = 4x - 6$
- 4)  $Slope = -\frac{2}{3}$   
 $y$ -int(0,1)  
 $y = -\frac{2}{3}x + 1$
- 5)  $Slope = \frac{1}{2}$   
 $y$ -int(0,4)  
 $y = \frac{1}{2}x + 4$
- 6)  $Slope = -\frac{3}{4}$   
 $y$ -int(0,2)  
 $y = -\frac{3}{4}x + 2$